


# Multiplication and Division

Name \_\_\_\_\_

1 Complete the sentences.




There are \_\_\_\_\_ equal groups of \_\_\_\_\_ flowers.

There are \_\_\_\_\_ flowers in total.

2 marks

2 Complete the number sentences for the array.



$$\underline{\quad\quad} + \underline{\quad\quad} + \underline{\quad\quad} = \underline{\quad\quad}$$

$$\underline{\quad\quad} \times \underline{\quad\quad} = \underline{\quad\quad}$$

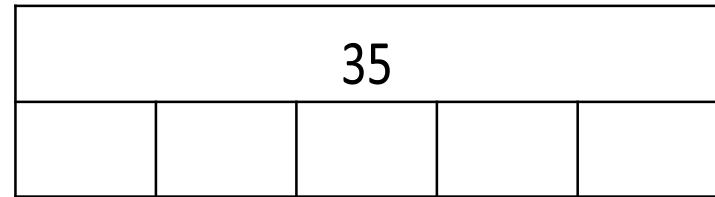
2 marks

3 Five people have 8 grapes each.  
How many grapes do they have altogether?

\_\_\_\_\_ grapes

1 mark

4 Complete the bar model.




1 mark

5 Teddy has 32 cars to tidy away.  
He puts 8 cars in each box.  
How many boxes are needed?

\_\_\_\_\_ boxes


1 mark

Tick all the statements that are equal to  $8 \times 2$

$2 \times 8$	<input type="checkbox"/>
$7 \times 2 + 2$	<input type="checkbox"/>
$4 \times 4$	<input type="checkbox"/>
$7 \times 2 + 8$	<input type="checkbox"/>

2 marks

A blue hat costs £9  
A red hat costs 4 times as much.



How much do the blue hat and red hat cost altogether?

£ \_\_\_\_\_

2 marks

8 Fill in the boxes.

Use a different number in each box.

$$24 \div \square = \square$$

$$\square = 24 \div \square$$

2 marks

9 Complete the missing number.

$$\square \times 4 = 32 \div 4$$

1 mark

10 I am dividing a 2-digit number by 3  
My answer is a whole number.  
What could my missing digit be?

$$1 \square \square \div 3$$

List all the possible answers.

\_\_\_\_\_

1 mark

Circle how confident you feel with multiplication & division.

1

2

3

4

5

Not  
confident

Very  
confident